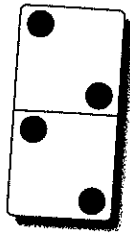
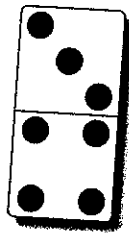
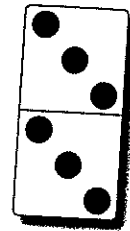
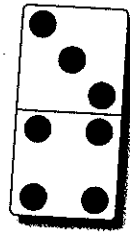


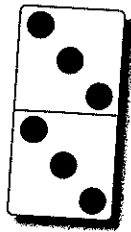
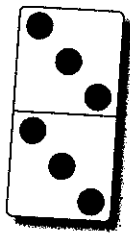

Use the dominoes to help you add.



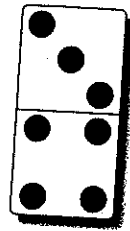
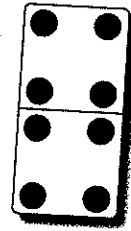
$7 + 4 =$



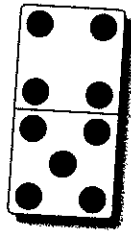
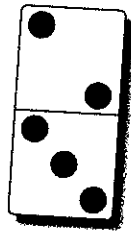

$7 + 6 =$



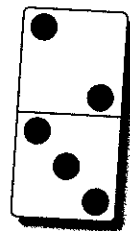
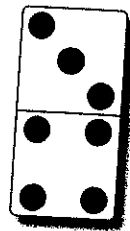
$6 + 6 =$



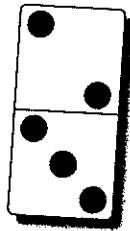
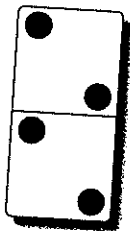
$8 + 7 =$



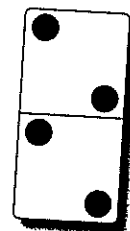
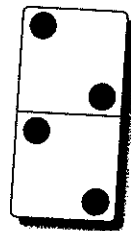
$5 + 9 =$




$7 + 5 =$



$4 + 5 =$



$4 + 4 =$




Write number sentences to solve the word problems.


1. Jessie collected 2 smiley stickers, 3 clown stickers, and 6 star stickers. How many stickers did Jessie collect in all?

$$2 + 3 + 6 = 11$$


2. Hunter counted 2 windows in the kitchen, 4 windows in the living room, and 1 in his bedroom. How many windows did Hunter count?




3. Bretta had 5 crayons, 3 markers, and 4 pens on her desk. How many things were on her desk all together?




4. Lila put 3 red flowers in a vase. Then she added 4 yellow flowers and 3 purple ones. How many flowers did Lila put in the vase?




5. Paul made a tower with 8 blue blocks, 3 purple blocks, and 2 green blocks. How many blocks were in Paul's tower?



6. Tony found 6 paper clips, 7 pennies, and 2 buttons. How many things did Tony find?



Use the number line to find the sums.



$20 + 7 = \square$

$24 + 1 = \square$

$23 + 5 = \square$

$23 + 3 = \square$

$22 + 2 = \square$

$25 + 5 = \square$

$26 + 3 = \square$


$21 + 3 = \square$

Write number sentences to solve the word problems.

1. Carlos stacked 12 blue blocks. Then he stacked 6 red blocks. How many blocks did Carlos stack in all?




2. Jack had 7 books and Marla had 9 books. How many books did they have all together?



3. Nathan found 15 marbles under his bed. He found 5 marbles in his toy box. How many marbles did he find in all?



4. Anna put 6 toys in her closet, and she put 11 on her shelf. How many toys did Anna put away in all?



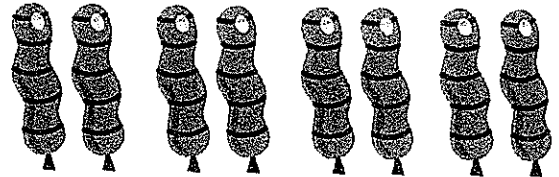
5. Maya has 14 stuffed animals on her bed. She has 5 baby dolls on her bed. How many toys does she have on her bed in all?



6. Charlie counted 8 toy cars and 7 toy trucks. How many toys did he count in all?

Draw a picture to help, and write the number sentence.

1. Four children have
2 balloons each.
How many balloons
all together?



$$2 + 2 + 2 + 2 = 8$$

2. Six dresses have 3
buttons each. How
many buttons in all?
-
3. Five chickens each
have 4 eggs. How
many eggs in all?
4. Two bugs have 6 spots
each. How many spots
in all?